

## Unit 3 – Moles & Stoichiometry

At the end of this unit, you'll know...

- ✓ A compound is a substance composed of two or more different elements that are chemically combined in a fixed proportion. A chemical compound can only be broken down by chemical means.
- ✓ Chemical compounds can be represented by a specific formula and assigned a name based on the IUPAC system.
- ✓ Types of chemical formulas include empirical, molecular, and structural.
- ✓ Empirical formulas show elements in their simplest whole number ratios. This may or may not be the same as the molecular formula.
- ✓ Molecular formulas show the actual number of atoms per element in a single molecule.
- ✓ Structural formulas show the number of each type of atom as well as their physical arrangement.
- ✓ All chemical reactions show a conservation of mass, energy and charge.
- ✓ A balanced chemical equation represents conservation of atoms.
- ✓ The coefficients in a balanced chemical equation can be used to determine mole ratios in the reaction.
- ✓ The formula mass of a substance is the sum of the atomic masses of its atoms. The molar mass (gram formula mass) equals the mass of one mole of that substance.
- ✓ The percent composition by mass of each element in a compound can be calculated mathematically.
- ✓ Types of chemical reactions include synthesis, decomposition single replacement, and double replacement.

Term	Definition
Balanced equation	a chemical equation in which the number of moles of each element on the reactants side is equal to the number of moles of each element on the products side
Coefficient	the integer that appears in front of an element, molecule, or compound indicating the number of moles present
Decomposition reaction	a chemical reaction in which a compound is broken down into simpler substance Ex: $AB \rightarrow A + B$
Double-replacement reaction	a chemical reaction in which a metal replaces a metal AND a nonmetal replaces a nonmetal within two compounds; two compounds "trade" elements Ex: $AB + XY \rightarrow AY + XB$
Empirical formula	formula for a compound which provides the simplest ratio of the elements present Ex: The empirical formula for the molecule $C_6H_{12}O_6$ is $CH_2O$
Formula mass (FM)	the sum of the atomic masses of a substance in a.m.u.
Gram formula mass (GFM)	the sum of the atomic masses of a substance in grams
Law of conservation of energy	in any chemical reaction, energy can neither be created nor destroyed; the energy of the reactants must be equal to the energy of the products
Law of conservation of mass	in any chemical reaction, mass can neither be created nor destroyed; the mass of the reactants must be equal to the mass of the products
Mole	a quantity of $6.02 \times 10^{23}$ units of a substance; the amount of a substance equal to the sum of the atomic masses in grams; Avogadro's number
Molecular formula	formula for a compound which provides the number and identity of the atoms of each element present Ex: $C_6H_{12}O_6$
Percent mass	mass of part/mass of whole $\times 100\%$
Single-replacement reaction	a chemical reaction in which a metal replaces a metal OR a nonmetal replaces a nonmetal within a compound Ex: $A + BC \rightarrow AC + B$
Species	the individual products and reactants in a chemical reaction
Subscript	the integer to the lower right of an element which indicates the number of atoms present in the compound
Synthesis reaction	a chemical reaction in which two or more substances combine to form a compound Ex: $A + B \rightarrow AB$

Period \_\_\_\_\_

## Elements and Compounds

\_\_\_\_\_ 1) Which of the following **CAN** be decomposed by chemical change?

- a)  $\text{SO}_2$       b)  $\text{N}_2$       c) Ne      d) Al

\_\_\_\_\_ 2) Which of the following fictitious element symbols are legitimate?

- a) Cn      b) HB      c) zL      d) r

\_\_\_\_\_ 3) Which of the following substances can not be decomposed by chemical change?

- a) Na      b)  $\text{HNO}_3$       c)  $\text{ZnCl}_2$       d)  $\text{C}_6\text{H}_{12}\text{O}_6$

\_\_\_\_\_ 4) You have discovered a new element and name it. Which one of the following symbols may be used for your new element?

- a) U      b) DG      c) nD      d) Sd

\_\_\_\_\_ 5) Which of the following substances can be decomposed by chemical change?

- a) Na      b) Cl      c) NaCl      d) K

\_\_\_\_\_ 6) Which of the following represents a homogeneous mixture?

- a) NaCl (s)      b) NaCl (l)      c) NaCl (aq)      d) NaCl (g)

\_\_\_\_\_ 7) Which of the following represents a heterogeneous mixture?

- a) air      b) soil      c) salt water      d) sugar

8) Draw a particle diagram of a compound of  $\text{CaCl}_2$ , using black solid circles to represent the Ca and empty circles to represent the Cl. Draw at least five molecules of  $\text{CaCl}_2$  in the box below:



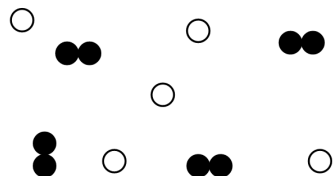
Period \_\_\_\_\_

## Elements and Compounds

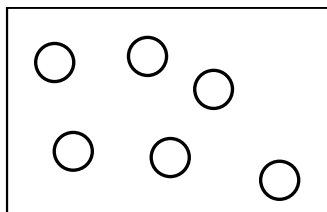
- 9 Which substance can be decomposed by chemical means?
- (1) ammonia                      (3) phosphorus  
(2) oxygen                        (4) silicon
- 10 Which substance can be decomposed by chemical means?
- (1) tungsten                      (3) krypton  
(2) antimony                      (4) methane
- 11 Bronze contains 90 to 95 percent copper and 5 to 10 percent tin. Because these percentages can vary, bronze is classified as
- (1) a compound                      (3) a mixture  
(2) an element                      (4) a substance

Label each of the following as Element, Compound, Mixture of elements, mixture of compounds, or mixture of both (elements and compounds).


12



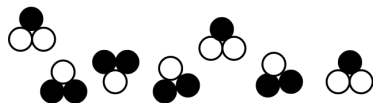
13



14



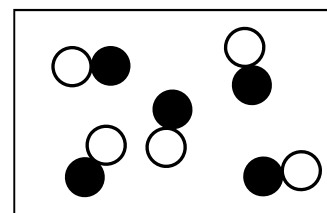
15



16



17



Name \_\_\_\_\_

Date \_\_\_\_\_

Period \_\_\_\_\_

## Naming Compounds

### M-NM

1. NaBr \_\_\_\_\_

9. Cu<sub>3</sub>P \_\_\_\_\_

2. CaO \_\_\_\_\_

10. SnSe<sub>2</sub> \_\_\_\_\_3. Li<sub>2</sub>S \_\_\_\_\_

11. GaAs \_\_\_\_\_

4. MgBr<sub>2</sub> \_\_\_\_\_12. Pb(SO<sub>4</sub>)<sub>2</sub> \_\_\_\_\_5. Be(OH)<sub>2</sub> \_\_\_\_\_13. Be(HCO<sub>3</sub>)<sub>2</sub> \_\_\_\_\_6. NH<sub>4</sub>Cl \_\_\_\_\_14. Mn<sub>2</sub>(SO<sub>3</sub>)<sub>3</sub> \_\_\_\_\_7. Fe(NO<sub>3</sub>)<sub>3</sub> \_\_\_\_\_15. Al(CN)<sub>3</sub> \_\_\_\_\_8. TiBr<sub>3</sub> \_\_\_\_\_

### NM-NM

16. SO<sub>3</sub> \_\_\_\_\_

21. CO \_\_\_\_\_

17. N<sub>2</sub>S \_\_\_\_\_22. SiO<sub>2</sub> \_\_\_\_\_18. PH<sub>3</sub> \_\_\_\_\_23. SF<sub>6</sub> \_\_\_\_\_19. BF<sub>3</sub> \_\_\_\_\_24. NH<sub>3</sub> \_\_\_\_\_20. P<sub>2</sub>Br<sub>4</sub> \_\_\_\_\_25. NO<sub>2</sub> \_\_\_\_\_

### Mixed

26. Fe(CN)<sub>3</sub> \_\_\_\_\_32. NH<sub>3</sub> \_\_\_\_\_27. Mg<sub>3</sub>N<sub>2</sub> \_\_\_\_\_33. FeSO<sub>4</sub> \_\_\_\_\_28. N<sub>2</sub>O \_\_\_\_\_34. SiO<sub>2</sub> \_\_\_\_\_29. H<sub>2</sub>O \_\_\_\_\_35. GaCl<sub>3</sub> \_\_\_\_\_30. Na<sub>2</sub>CO<sub>3</sub> \_\_\_\_\_36. CoBr<sub>2</sub> \_\_\_\_\_31. P<sub>2</sub>O<sub>5</sub> \_\_\_\_\_37. B<sub>2</sub>H<sub>4</sub> \_\_\_\_\_

Name \_\_\_\_\_

Date \_\_\_\_\_

Period \_\_\_\_\_

## Molecular Formula from Name

1. magnesium acetate \_\_\_\_\_
2. boron carbide \_\_\_\_\_
3. calcium carbonate \_\_\_\_\_
4. aluminum carbonate \_\_\_\_\_
5. aluminum chloride \_\_\_\_\_
6. calcium chloride \_\_\_\_\_
7. ammonium chloride \_\_\_\_\_
8. sodium cyanide \_\_\_\_\_
9. sulfur dibromide \_\_\_\_\_
10. oxygen difluoride \_\_\_\_\_
11. carbon disulfide \_\_\_\_\_
12. magnesium hydroxide \_\_\_\_\_
13. potassium iodide \_\_\_\_\_
14. nitrogen monoxide \_\_\_\_\_
15. sodium nitrate \_\_\_\_\_
16. magnesium oxide \_\_\_\_\_
17. aluminum oxide \_\_\_\_\_
18. phosphorus pentafluoride \_\_\_\_\_
19. sodium phosphate \_\_\_\_\_
20. beryllium phosphide \_\_\_\_\_
21. lithium sulfate \_\_\_\_\_
22. diboron tetrahydride \_\_\_\_\_
23. nitrogen trichloride \_\_\_\_\_
24. dinitrogen trioxide \_\_\_\_\_

Name \_\_\_\_\_

Date \_\_\_\_\_

Period \_\_\_\_\_

25. iron (III) sulfite \_\_\_\_\_
26. chromium (III) sulfide \_\_\_\_\_
27. calcium carbonate \_\_\_\_\_
28. sodium acetate \_\_\_\_\_
29. cobalt (II) fluoride \_\_\_\_\_
30. sodium phosphide \_\_\_\_\_
31. tin (IV) oxide \_\_\_\_\_
32. gold (III) bromide \_\_\_\_\_
33. copper (II) iodide \_\_\_\_\_
34. strontium chloride \_\_\_\_\_
35. lithium acetate \_\_\_\_\_
36. magnesium hydroxide \_\_\_\_\_
37. nickel (II) nitrate \_\_\_\_\_
38. chromium (III) sulfite \_\_\_\_\_
39. copper (II) sulfide \_\_\_\_\_
40. iron (III) bromide \_\_\_\_\_
41. aluminum nitride \_\_\_\_\_
42. calcium sulfate \_\_\_\_\_
43. sodium phosphate \_\_\_\_\_
44. iron (III) nitrate \_\_\_\_\_
45. ammonium carbonate \_\_\_\_\_
46. sulfur tetrafluoride \_\_\_\_\_
47. xenon tetrafluoride \_\_\_\_\_
48. dihydrogen monoxide \_\_\_\_\_

## Writing Ionic Formulas

Use the crisscross method to predict the simplest possible formula

	$\text{Cl}^-$	$\text{OH}^-$	$\text{CO}_3^{2-}$	$\text{SO}_4^{2-}$	$\text{PO}_4^{3-}$
$\text{Na}^+$					
$\text{NH}_4^+$					
$\text{K}^+$					
$\text{Ca}^{2+}$					
$\text{Mg}^{2+}$					
$\text{Fe}^{3+}$					
$\text{Al}^{3+}$					
$\text{Co}^{3+}$					
$\text{Fe}^{2+}$					
$\text{H}^+$					



Name \_\_\_\_\_

Date \_\_\_\_\_

Period \_\_\_\_\_

## Formulas

1. Explain the difference between a molecular formula and an empirical formula. \_\_\_\_\_

\_\_\_\_\_

2. Write the empirical formula for each of the following:

a.  $C_6H_{12}O_6$  \_\_\_\_\_

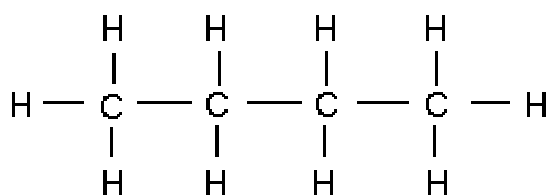
b.  $O_2F_2$  \_\_\_\_\_

c.  $P_4O_6$  \_\_\_\_\_

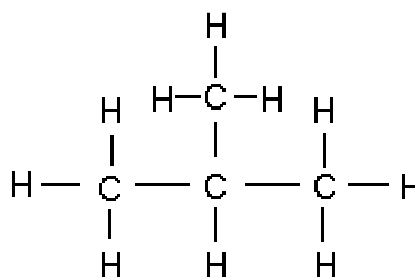
d.  $C_2H_6O_2$  \_\_\_\_\_

e.  $C_2H_4O_2$  \_\_\_\_\_

f.  $C_7H_{15}COOH$  \_\_\_\_\_



butane



methylpropane

3. Write the molecular formula for butane. \_\_\_\_\_

4. Write the molecular formula for methylpropane. \_\_\_\_\_

5. Compound X has been found to contain twice as many hydrogen atoms as carbon atoms and no other elements.

a. Write the empirical formula for compound X. \_\_\_\_\_

b. Of the molecular formulas in the box below, which ones could possibly represent compound X?

\_\_\_\_\_

6. Compound Y has been found to contain elements in the following ratio: 3 carbon atoms : 6 hydrogen atoms : 1 oxygen atoms.

a. Write the empirical formula for compound Y. \_\_\_\_\_

b. Of the molecular formulas in the box below, which ones could possibly represent compound Y?

\_\_\_\_\_

$CH_3$	$C_5H_{10}$	$C_6H_{12}O_2$		
$C_{12}H_{26}$	$C_{11}H_{22}$	$C_2H_4$		
$C_{10}H_{20}O_3$	$CH_4$	$C_4H_6$	$CH_2$	

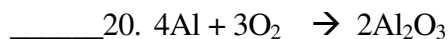
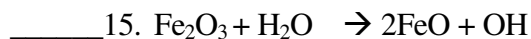
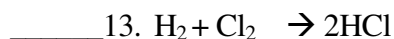
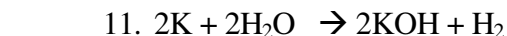
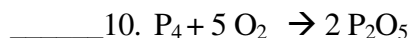
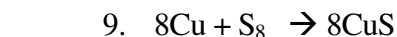
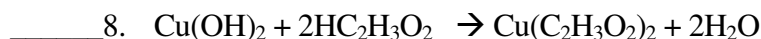
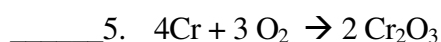
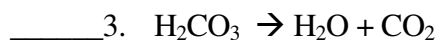
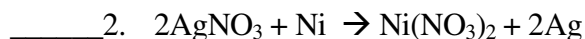
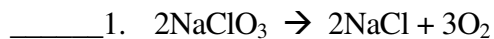
Name \_\_\_\_\_

Date \_\_\_\_\_

Period \_\_\_\_\_

## Identifying Reaction Types

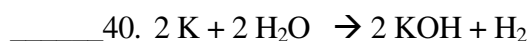
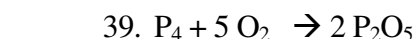
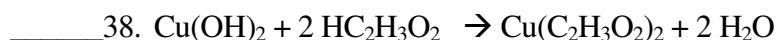
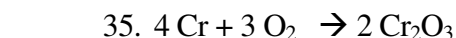
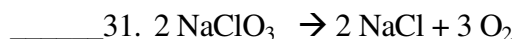
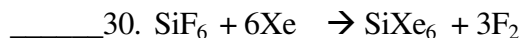
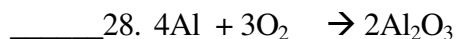
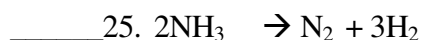
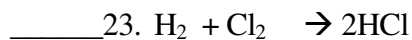
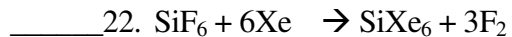
Determine if the following are synthesis (S), decomposition (D), single replacement (SR), or double replacement (DR) reactions.



Name \_\_\_\_\_

Date \_\_\_\_\_

Period \_\_\_\_\_

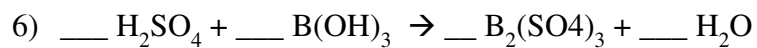
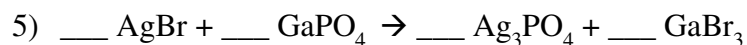
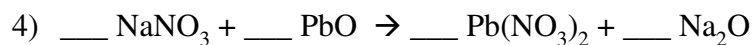
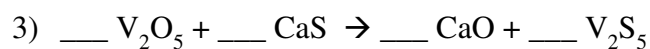
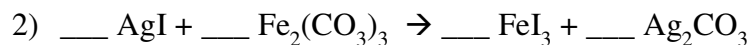
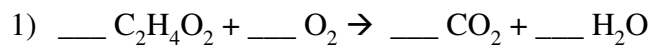


Name \_\_\_\_\_

Date \_\_\_\_\_

Period \_\_\_\_\_

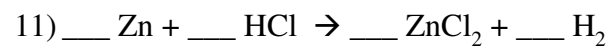
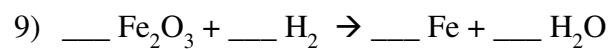
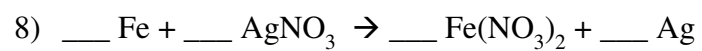
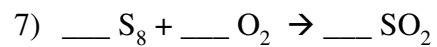
## Balancing Equations



Name \_\_\_\_\_

Date \_\_\_\_\_

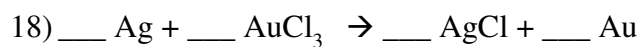
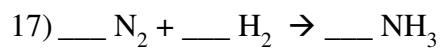
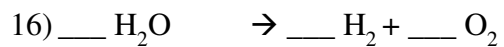
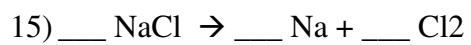
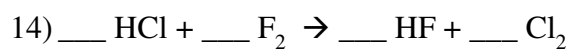
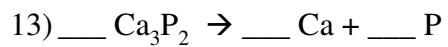
Period \_\_\_\_\_



Name \_\_\_\_\_

Date \_\_\_\_\_

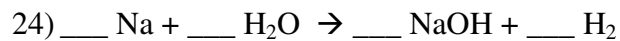
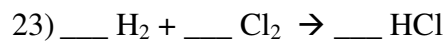
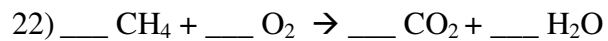
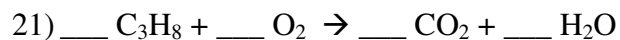
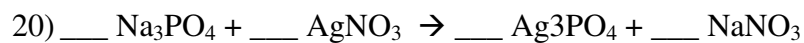
Period \_\_\_\_\_



Name \_\_\_\_\_

Date \_\_\_\_\_

Period \_\_\_\_\_



Name \_\_\_\_\_

Date \_\_\_\_\_

Period \_\_\_\_\_

## Identifying Reaction Types

Identify the reaction type and balance the following:

Reaction	Reaction Type
1. $\_\_ \text{N}_2 + \_\_ \text{H}_2 \rightarrow \_\_ \text{NH}_3$	
2. $\_\_ \text{KClO}_3 \rightarrow \_\_ \text{KCl} + \_\_ \text{O}_2$	
3. $\_\_ \text{Zn} + \_\_ \text{HCl} \rightarrow \_\_ \text{ZnCl}_2 + \_\_ \text{H}_2$	
4. $\_\_ \text{C}_3\text{H}_8 + \_\_ \text{O}_2 \rightarrow \_\_ \text{CO}_2 + \_\_ \text{H}_2\text{O}$	
5. $\_\_ \text{NaCl} + \_\_ \text{F}_2 \rightarrow \_\_ \text{NaF} + \_\_ \text{Cl}_2$	
6. $\_\_ \text{K}_3\text{PO}_4 + \_\_ \text{Al}(\text{NO}_3)_3 \rightarrow \_\_ \text{KNO}_3 + \_\_ \text{AlPO}_4$	
7. $\_\_ \text{H}_2 + \_\_ \text{O}_2 \rightarrow \_\_ \text{H}_2\text{O}$	
8. $\_\_ \text{AgNO}_3 + \_\_ \text{MgCl}_2 \rightarrow \_\_ \text{AgCl} + \_\_ \text{Mg}(\text{NO}_3)_2$	



9. $\_\_ \text{CH}_4 + \_\_ \text{O}_2 \rightarrow \_\_ \text{CO}_2 + \_\_ \text{H}_2\text{O}$	
10. $\_\_ \text{AlBr}_3 + \_\_ \text{K}_2\text{SO}_4 \rightarrow \_\_ \text{KBr} + \_\_ \text{Al}_2(\text{SO}_4)_3$	
11. $\_\_ \text{FeCl}_3 + \_\_ \text{NaOH} \rightarrow \_\_ \text{Fe}(\text{OH})_3 + \_\_ \text{NaCl}$	
12. $\_\_ \text{P} + \_\_ \text{O}_2 \rightarrow \_\_ \text{P}_2\text{O}_5$	
13. $\_\_ \text{C}_3\text{H}_8 + \_\_ \text{O}_2 \rightarrow \_\_ \text{CO}_2 + \_\_ \text{H}_2\text{O}$	
14. $\_\_ \text{S}_8 + \_\_ \text{O}_2 \rightarrow \_\_ \text{SO}_3$	
15. $\_\_ \text{K} + \_\_ \text{MgBr}_2 \rightarrow \_\_ \text{KBr} + \_\_ \text{Mg}$	
16. $\_\_ \text{Na}_2\text{CO}_3 + \_\_ \text{Ca}(\text{OH})_2 \rightarrow \_\_ \text{NaOH} + \_\_ \text{CaCO}_3$	

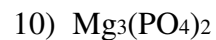

Name \_\_\_\_\_

Date \_\_\_\_\_

Period \_\_\_\_\_

## Formula Mass

Calculate the formula mass for the following:



Name \_\_\_\_\_  
Period \_\_\_\_\_

Date \_\_\_\_\_

**Molar Mass – GFM***Find the gfm of the following compounds.*

1) NaBr

8)  $(\text{NH}_4)_2\text{S}$ 2)  $\text{PbSO}_4$ 9)  $\text{Zn}(\text{C}_2\text{H}_3\text{O}_2)_2$ 3)  $\text{Ca}(\text{OH})_2$ 

10) AgF

4)  $\text{Na}_3\text{PO}_4$ 11)  $\text{H}_2\text{SO}_4$ 5)  $(\text{NH}_4)_2\text{CO}_3$ 12)  $\text{NH}_4\text{OH}$ 6)  $\text{C}_6\text{H}_{12}\text{O}_6$ 13)  $\text{Al}_2(\text{SO}_4)_3$ 7)  $\text{Fe}_3(\text{PO}_4)_2$ 14)  $\text{O}_2$

Name \_\_\_\_\_  
Period \_\_\_\_\_

Date \_\_\_\_\_

Convert the following from grams to moles:

1) 15.0 g  $C_6H_{12}O_6$

2) 25.0 g NaOH

3) 54.0 g HCl

4) 13.0 g  $H_2O$

5) 23.0 g  $Ca(NO_3)_2$

6) 1.00 g  $H_2SO_4$

7) 0.105 g  $O_2$

Convert the following from moles to grams:

1) 0.500 moles LiF

2) 0.1188 moles NaOH

3) 4.00 moles KCl

4) 10.0 moles  $H_2O_2$

5) 13.0 moles  $Na_2CO_3$

6) 28.0 moles  $H_2O$

7) 0.800 moles  $NH_3$

Name \_\_\_\_\_  
Period \_\_\_\_\_

Date \_\_\_\_\_

### Grams, Molecules, and Moles Worksheet

- 1) How many molecules are there in 32.0 grams of  $\text{FeF}_3$ ? **Molecules:** \_\_\_\_\_
- 2) How many molecules are there in 250. grams of  $\text{Na}_2\text{SO}_4$ ? **Molecules:** \_\_\_\_\_
- 3) How many grams are there in  $4.60 \times 10^{24}$  atoms of silver? **Grams:** \_\_\_\_\_
- 4) How many grams are there in  $4.70 \times 10^{23}$  molecules of  $\text{AgNO}_3$ ? **Grams:** \_\_\_\_\_
- 5) How many grams are there in  $5.70 \times 10^{23}$  molecules of  $\text{H}_2\text{SO}_4$ ? **Grams:** \_\_\_\_\_
- 6) How many molecules are there in 221 grams of  $\text{Cu}(\text{NO}_3)_2$ ? **Molecules:** \_\_\_\_\_

Name \_\_\_\_\_

Date \_\_\_\_\_

Period \_\_\_\_\_

7) How many grams are there in  $4.90 \times 10^{25}$  molecules of  $H_2$ ? **Molecules:** \_\_\_\_\_8) How many molecules are there 230. grams of  $CoCl_2$ ? **Molecules:** \_\_\_\_\_9) How many molecules are there in 3.20 grams of  $NH_4SO_2$ ? **Molecules:** \_\_\_\_\_10) How many grams are there in  $4.40 \times 10^{23}$  molecules of  $N_2I_6$ ? **Grams:** \_\_\_\_\_11) How many molecules are there in 120.0 grams of  $CCl_4$ ? **Molecules:** \_\_\_\_\_12) How many molecules are there 4.39 grams of  $LiCl$ ? **Molecules:** \_\_\_\_\_

Name \_\_\_\_\_  
Period \_\_\_\_\_

Date \_\_\_\_\_

**Solutions to the Molar Mass Practice Worksheet:**

Important note to students: The 'mole' is a unit commonly used to indicate a number of things about the amount of material present. I will be introducing it this week. All of the units given here are "grams per mole", which may be abbreviated as "g/mol", "grams/mol", or " $\text{g} \cdot \text{mol}^{-1}$ ", depending on how your teacher likes to see it written. They all mean the same thing, but it's probably a good idea to use whatever your teacher showed you in class. Also, remember that if you don't use units in your answer, the answer is *wrong!*

All answers are rounded to the nearest 0.1 grams.

- 1) 102.9 g/mol
- 2) 303.3 g/mol
- 3) 74.1 g/mol
- 4) 164.0 g/mol
- 5) 96.0 g/mol
- 6) 180.0 g/mol
- 7) 357.4 g/mol
- 8) 68.1 g/mol
- 9) 183.4 g/mol
- 10) 126.9 g/mol

Name \_\_\_\_\_  
 Period \_\_\_\_\_

Date \_\_\_\_\_

## Empirical Formula Worksheet

Molecular formula from empirical formula and molecular mass.

Step 1 – Write the empirical formula.

Step 2 – Calculate the empirical formula mass.

Step 3 – Write the molar mass.

Step 4 – Divide the empirical mass by the molar mass – this is your multiplier.

Step 5 – Multiply empirical subscripts by your multiplier – this is your molecular formula.

Empirical Formula	Empirical Formula Mass	Molar Mass	Multiplier	Molecular Formula

1. A compound has an empirical formula of  $\text{NO}_2$  and a molecular mass of 92. What is the molecular formula?
2. A compound with an empirical formula of  $\text{CH}_2$  has a molecular mass of 70. What is the molecular formula?
3. A compound has an empirical formula of  $\text{CH}_2$  and a molecular mass of 42. What is the molecular formula?





Name \_\_\_\_\_

Date \_\_\_\_\_

Period \_\_\_\_\_

8. A compound has a molecular mass of 222 and an empirical formula of  $\text{Mn}(\text{C}_2\text{H}_4)_2$ . What is the molecular formula?
9. A compound has a molecular mass of 180 and an empirical formula of  $\text{CH}_2\text{O}$ . What is the molecular formula?
10. A compound has a molecular mass of 78 and an empirical formula of  $\text{CH}$ . What is the molecular formula?
11. A compound has a molecular mass of 70 and an empirical formula of  $\text{CH}_2$ . What is the molecular formula?

Name \_\_\_\_\_  
Period \_\_\_\_\_

Date \_\_\_\_\_

**Percent Composition**

Compound	GFM	% comp	% comp	% comp
$H_2SO_4$		% H	% S	% O
$CaCl_2$		% Ca	% Cl	
$H_2O$		% H	% O	
$CuCO_3$		% Cu	% C	% O
$NaCl$		% Na	% Cl	
$Al_2(PO_4)_3$		% Al	% P	% O
$KOH$		% K	% O	% H

Name \_\_\_\_\_  
 Period \_\_\_\_\_

Date \_\_\_\_\_

Compound	GFM	% comp	% comp	% comp
$C_2H_6$		% C	% H	
$ZnI_2$		% Zn	% I	
$CO_2$		% C	% O	
$CaO$		% Ca	% O	
$NO$		% N	% O	
$Fe_2O_3$		% Fe	% O	
$H_2O_2$		% H	% O	
$CuSO_4 \cdot 5H_2O$		% Cu	% $CuSO_4$	% $H_2O$

Name \_\_\_\_\_  
Period \_\_\_\_\_

Date \_\_\_\_\_

## Empirical Formula From Percent Composition

Determine the empirical formula for each of the following:

1. 92.24% C; 7.76% H

2. 36.48% Na; 25.44% S; 38.08% O

3. 49.99% C; 5.61% H; 44.40% O

4. 38.76% Ca; 19.97% P; 41.27% O

5. A compound composed of 0.556g carbon and 0.0933g hydrogen.

Name \_\_\_\_\_  
Period \_\_\_\_\_

Date \_\_\_\_\_

## Molecular Formula from Empirical Formula and Percent Composition

1. Calculate the molecular formula for the following:
  - a. empirical formula CH, molar mass = 78 g/mol

b. empirical formula NO<sub>2</sub>, molar mass = 46.01 g/mol

c. caffeine, 49.5% C, 5.15% H, 28.9% N, 16.5% O by mass, molar mass = 195 g

d. A compound analyzes as 79.08% C; 5.54% H and 15.38% N. What is the molecular formula if the molar mass is 273.36 g/mol?

Name \_\_\_\_\_

Date \_\_\_\_\_

Period \_\_\_\_\_

## Crystal Hydrates

1. Base your answer to the following question on A hydrate is a compound with water molecules incorporated into its crystal structure. In an experiment to find the percent by mass of water in a hydrated compound, the following data were recorded:

Mass of crucible + hydrated crystals before heating	7.50 grams
Mass of crucible	6.80 grams
Mass of crucible + anhydrous crystals after heating	7.20 grams

What is the percent by mass of water in the hydrate?

- A) 72. %      B) 50. %      C) 96. %      D) 8.0 %

2. The percent by mass of water in the hydrate  $\text{Na}_2\text{SO}_4 \cdot 10\text{H}_2\text{O}$  is closest to  
A) 18% B) 44% C) 76% D) 56%
3. What is the percent by mass of water present in 1.0 mole of  $\text{CaSO}_4 \cdot 2\text{H}_2\text{O}$ ?  
A) 79% B) 10.% C) 12% D) 21%
4. A student obtained the following data to determine the percent by mass of water in a hydrate.

Mass of empty crucible + cover .....	11.70 g
Mass of crucible + cover + hydrated salt before heating .....	14.90 g
Mass of crucible + cover + anhydrous salt after thorough heating .....	14.53 g

What is the approximate percent by mass of the water in the hydrated salt?

- A) 12% B) 88% C) 98% D) 2.5%
5. A 4.4 gram sample of a hydrate was heated until the water of hydration was driven off. The anhydrous compound remaining had a mass of 3.3 grams. What is the percentage by mass of water in the hydrate?  
A) 25% B) 33% C) 67% D) 75%

6. A 20. gram sample of a hydrate is heated until all the water of hydration is driven off. The mass of the anhydrous compound remaining is 15 grams. What is the percent by mass of water in the hydrate?  
A) 75% B) 15% C) 25% D) 33%
7. Which species contains the greatest percent by mass of hydrogen?  
A)  $\text{H}_3\text{O}^+$                       B)  $\text{H}_2\text{O}_2$   
C)  $\text{H}_2\text{O}$                               D)  $\text{OH}^-$
8. A 1.20-gram sample of a hydrated salt is heated to a constant mass of 0.80 gram. What was the percent by mass of water contained in the original sample?  
A) 20.    B) 33    C) 50.    D) 67
9. A student determining the percent by mass of water in a hydrated crystal obtained the following data.  
Mass of crystal before heating.....5.0 g  
Mass of crystal after 1st heating.....4.0 g  
Mass of crystal after 2nd heating.....4.0 g  
What is the percent by mass of water in the hydrate?  
A) 0.80%                      B) 0.20%  
C) 80.%                              D) 20.%
10. The percent by mass of water in  $\text{BaCl}_2 \cdot 2\text{H}_2\text{O}$  (formula mass = 243) is equal to  
A)  $\frac{18}{243} \times 100$                       B)  $\frac{243}{18} \times 100$   
C)  $\frac{243}{36} \times 100$                       D)  $\frac{36}{243} \times 100$

Name \_\_\_\_\_

Date \_\_\_\_\_

Period \_\_\_\_\_

11. A 10.0 gram sample of a hydrate was heated until all the water of hydration was driven off. The mass of anhydrous product remaining was 8.00 grams. What is the percent of water in the hydrate?
- A) 25.0%                      B) 12.5%  
C) 80.0%                      D) 20.0%

12. A 60. gram sample of  $\text{LiCl} \cdot \text{H}_2\text{O}$  is heated in an open crucible until all of the water has been driven off. What is the total mass of  $\text{LiCl}$  remaining in the crucible?

A) 42 g   B) 24 g   C) 18 g   D) 60 g

13. A student determining the percent by mass of water in a hydrated sample of salt obtained the following data:

Mass of hydrate 6.25 g

Mass of sample after 1st heating 5.12 g

Mass of sample after 2nd heating 5.12 g

The correct expression for obtaining the percent by mass of water in the sample is

- A)  $\frac{6.25 \text{ g}}{1.13 \text{ g}} \times 100$       B)  $\frac{5.12 \text{ g}}{6.25 \text{ g}} \times 100$   
C)  $\frac{6.25 \text{ g}}{5.12 \text{ g}} \times 100$       D)  $\frac{1.13 \text{ g}}{6.25 \text{ g}} \times 100$

14. An 8.24-gram sample of a hydrated salt is heated until it has a constant mass of 6.20 grams. What was the percent by mass of water contained in the original sample?

A) 75.2%                      B) 14.1%  
C) 24.8%                      D) 32.9%

Base your answers to questions 15 and 16 on the table below shows the data collected during the heating of a 5.0 gram sample of a hydrated salt.

Mass of Salt (g)	Heating Time (min)
5.0	0.0
4.1	5.0
3.1	10.
3.0	15.
3.0	30.
3.0	60.

15. What is the percent of water in the original sample?

A) 82.%                      B) 40.%  
C) 60.%                      D) 30.%

16. After 60. minutes, how many grams of water appear to remain in the salt?

A) 0.00   B) 2.0   C) 1.9   D) 0.90



Name \_\_\_\_\_  
Period \_\_\_\_\_

Date \_\_\_\_\_

## Mole Ratio Worksheet

1) Given this equation:  $\text{N}_2 + 3 \text{H}_2 \rightarrow 2 \text{NH}_3$ , write the following molar ratios:

a)  $\text{N}_2 / \text{H}_2$

b)  $\text{N}_2 / \text{NH}_3$

c)  $\text{H}_2 / \text{NH}_3$

2) Given the following equation:  $8 \text{H}_2 + \text{S}_8 \rightarrow 8 \text{H}_2\text{S}$ , write the following molar ratios:

a)  $\text{H}_2 / \text{H}_2\text{S}$

b)  $\text{H}_2 / \text{S}_8$

c)  $\text{H}_2\text{S} / \text{S}_8$

3) Answer the following questions for this equation:  $2 \text{H}_2 + \text{O}_2 \rightarrow 2 \text{H}_2\text{O}$

a) What is the  $\text{H}_2 / \text{H}_2\text{O}$  molar ratio?

b) Suppose you had 20 moles of  $\text{H}_2$  on hand and plenty of  $\text{O}_2$ , how many moles of  $\text{H}_2\text{O}$  could you make?

c) What is the  $\text{O}_2 / \text{H}_2\text{O}$  molar ratio?

d) Suppose you had 20 moles of  $\text{O}_2$  and enough  $\text{H}_2$ , how many moles of  $\text{H}_2\text{O}$  could you make?

4) Use this equation:  $\text{N}_2 + 3 \text{H}_2 \rightarrow 2 \text{NH}_3$ , for the following problems

a) If you used 1 mole of  $\text{N}_2$ , how many moles of  $\text{NH}_3$  could be produced?

b) If 10 moles of  $\text{NH}_3$  were produced, how many moles of  $\text{N}_2$  would be required?

c) If 3.00 moles of  $\text{H}_2$  were used, how many moles of  $\text{NH}_3$  would be made?

d) If 0.600 moles of  $\text{NH}_3$  were produced, how many moles of  $\text{H}_2$  are required?

Name \_\_\_\_\_  
Period \_\_\_\_\_

Date \_\_\_\_\_

**Mole/Mole Ratio Problems**

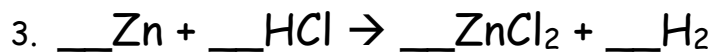
- How many moles of hydrogen are needed to completely react with two moles of nitrogen?
- How many moles of nitrogen trihydride can be produced with 5 moles of nitrogen?
- How many moles of nitrogen are needed to produce .5 moles of nitrogen trihydride?
- How many liters of nitrogen trihydride can be produced from 24 liters of nitrogen gas?



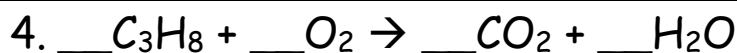
- How many moles of oxygen are produced by the decomposition of six moles of potassium chlorate?
- How many moles of potassium chloride are produced by the decomposition of .75 moles of potassium chlorate?
- How many moles of potassium chlorate are needed to produce 100 moles of oxygen?
- How many liters of oxygen will the decomposition of 100 liters of potassium chlorate produce?

Name \_\_\_\_\_  
Period \_\_\_\_\_

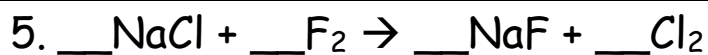
Date \_\_\_\_\_



- How many moles of hydrogen are produced from the reaction of three moles of zinc?
- How many moles zinc are needed to produce 3.5 moles of zinc chloride?
- How many moles of hydrogen can 15 moles hydrogen chloride produce?
- How many liters hydrogen chloride are needed react with 11 liters of zinc?



- How many moles of oxygen are necessary to react completely with four moles of Propane ( $\text{C}_3\text{H}_8$ )?
- How many moles of Propane ( $\text{C}_3\text{H}_8$ ) are needed to produce 25 moles of carbon dioxide?
- How many moles of water will 3 moles of propane ( $\text{C}_3\text{H}_8$ ) produce?
- How many liters of Propane ( $\text{C}_3\text{H}_8$ ) are needed to react with 75 liters of oxygen?



- How many moles of fluorine are needed to produce 3.2 moles of sodium chloride?
- How many moles of chlorine can be produced by using a total of 3 moles of sodium chloride?
- How many moles of sodium fluoride can five moles of fluorine produce?

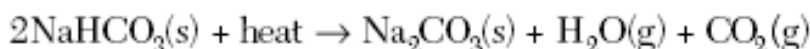
Period \_\_\_\_\_

**Math of Chemistry Review**

- 34 What is the gram-formula mass of  $\text{Ca}_3(\text{PO}_4)_2$ ?  
 (1) 248 g/mol (3) 279 g/mol  
 (2) 263 g/mol (4) 310. g/mol
- 17 What is the total number of different elements present in  $\text{NH}_4\text{NO}_3$ ?  
 (1) 7 (3) 3  
 (2) 9 (4) 4

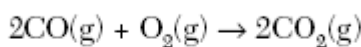
Base your answers to questions 77 through 79 on the information below.

Some dry chemicals can be used to put out forest fires. One of these chemicals is  $\text{NaHCO}_3$ . When  $\text{NaHCO}_3(s)$  is heated, one of the products is  $\text{CO}_2(g)$ , as shown in the balanced equation below.



- 77 In the space in *your answer booklet*, show a correct numerical setup for calculating the percent composition by mass of carbon in the product  $\text{Na}_2\text{CO}_3$ . [1]
- 78 Identify the type of chemical reaction represented by this equation. [1]
- 79 Determine the total number of moles of  $\text{CO}_2(g)$  produced when 7.0 moles of  $\text{NaHCO}_3(s)$  is completely reacted. [1]

- 10 Given the balanced equation representing a reaction:



What is the mole ratio of  $\text{CO}(g)$  to  $\text{CO}_2(g)$  in this reaction?

- (1) 1:1 (3) 2:1  
 (2) 1:2 (4) 3:2

- 12 Which polyatomic ion contains the greatest number of oxygen atoms?

- (1) acetate (3) hydroxide  
 (2) carbonate (4) peroxide

- 51 What is the oxidation number of nitrogen in  $\text{NO}(g)$ ? [1]

51 \_\_\_\_\_

- 35 A compound has a molar mass of 90. grams per mole and the empirical formula  $\text{CH}_2\text{O}$ . What is the molecular formula of this compound?

- (1)  $\text{CH}_2\text{O}$  (3)  $\text{C}_3\text{H}_6\text{O}_3$   
 (2)  $\text{C}_2\text{H}_4\text{O}_2$  (4)  $\text{C}_4\text{H}_8\text{O}_4$

- 9 What is the name of the polyatomic ion in the compound  $\text{Na}_2\text{O}_2$ ?

- (1) hydroxide (3) oxide  
 (2) oxalate (4) peroxide

Period \_\_\_\_\_

9 What is the name of the polyatomic ion in the compound  $\text{Na}_2\text{O}_2$ ?

- (1) hydroxide (3) oxide  
(2) oxalate (4) peroxide

36 Which formula represents lead(II) chromate?

- (1)  $\text{PbCrO}_4$  (3)  $\text{Pb}_2\text{CrO}_4$   
(2)  $\text{Pb}(\text{CrO}_4)_2$  (4)  $\text{Pb}_2(\text{CrO}_4)_3$

36 Given the balanced equation representing a reaction:



What is the *minimum* number of moles of  $\text{O}_2$  that are needed to completely react with 16 moles of  $\text{NH}_3$ ?

- (1) 16 mol (3) 64 mol  
(2) 20. mol (4) 80. mol

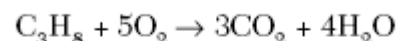
18 Bronze contains 90 to 95 percent copper and 5 to 10 percent tin. Because these percentages can vary, bronze is classified as

- (1) a compound (3) a mixture  
(2) an element (4) a substance

38 Which pair consists of a molecular formula and its corresponding empirical formula?

- (1)  $\text{C}_2\text{H}_2$  and  $\text{CH}_3\text{CH}_3$  (3)  $\text{P}_4\text{O}_{10}$  and  $\text{P}_2\text{O}_5$   
(2)  $\text{C}_6\text{H}_6$  and  $\text{C}_2\text{H}_2$  (4)  $\text{SO}_2$  and  $\text{SO}_3$

10 Given the balanced equation representing the reaction between propane and oxygen:



According to this equation, which ratio of oxygen to propane is correct?

- (1)  $\frac{5 \text{ grams O}_2}{1 \text{ gram C}_3\text{H}_8}$  (3)  $\frac{10 \text{ grams O}_2}{11 \text{ grams C}_3\text{H}_8}$   
(2)  $\frac{5 \text{ moles O}_2}{1 \text{ mole C}_3\text{H}_8}$  (4)  $\frac{10 \text{ moles O}_2}{11 \text{ moles C}_3\text{H}_8}$

17 Which substance can be decomposed by chemical means?

- (1) tungsten (3) krypton  
(2) antimony (4) methane

55 Determine the percent composition by mass of oxygen in the compound  $\text{C}_8\text{H}_{12}\text{O}_6$ . [1]

55 \_\_\_\_\_ %

54 A hydrated compound contains water molecules within its crystal structure. The percent composition by mass of water in the hydrated compound  $\text{CaSO}_4 \cdot 2\text{H}_2\text{O}$  has an accepted value of 20.9%. A student did an experiment and determined that the percent composition by mass of water in  $\text{CaSO}_4 \cdot 2\text{H}_2\text{O}$  was 21.4%.

54

In the space in *your answer booklet*, calculate the percent error of the student's experimental result. Your response must include *both* a correct numerical setup and the calculated result. [2]

\_\_\_\_\_ %

Period \_\_\_\_\_

- 6 A compound is made up of iron and oxygen, only. The ratio of iron ions to oxide ions is 2:3 in this compound. The IUPAC name for this compound is

(1) triiron dioxide            (3) iron(III) oxide  
 (2) iron(II) oxide            (4) iron trioxide

- 37 The percent composition by mass of magnesium in  $\text{MgBr}_2$  (gram-formula mass = 184 grams/mole) is equal to

(1)  $\frac{24}{184} \times 100$             (3)  $\frac{184}{24} \times 100$   
 (2)  $\frac{160}{184} \times 100$             (4)  $\frac{184}{160} \times 100$

- 51 In the space in *your answer booklet*, draw a Lewis electron-dot diagram for a sulfur atom in the ground state. [1]



- 6 What is the IUPAC name for the compound  $\text{FeS}$ ?

(1) iron(II) sulfate            (3) iron(II) sulfide  
 (2) iron(III) sulfate            (4) iron(III) sulfide

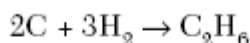
- 35 In which compound is the percent composition by mass of chlorine equal to 42%?

(1)  $\text{HClO}$  (gram-formula mass = 52 g/mol)  
 (2)  $\text{HClO}_2$  (gram-formula mass = 68 g/mol)  
 (3)  $\text{HClO}_3$  (gram-formula mass = 84 g/mol)  
 (4)  $\text{HClO}_4$  (gram-formula mass = 100. g/mol)

- 33 A substance has an empirical formula of  $\text{CH}_2$  and a molar mass of 56 grams per mole. The molecular formula for this compound is

(1)  $\text{CH}_2$                       (3)  $\text{C}_4\text{H}_8$   
 (2)  $\text{C}_4\text{H}_6$                       (4)  $\text{C}_8\text{H}_4$

- 36 Given the balanced equation:



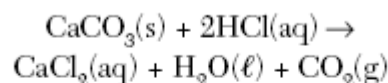
What is the total number of moles of C that must completely react to produce 2.0 moles of  $\text{C}_2\text{H}_6$ ?

(1) 1.0 mol                      (3) 3.0 mol  
 (2) 2.0 mol                      (4) 4.0 mol

- 9 What is the total number of pairs of electrons shared in a molecule of  $\text{N}_2$ ?

(1) one pair                      (3) three pairs  
 (2) two pairs                      (4) four pairs

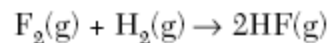
- 38 Given the balanced equation:



What is the total number of moles of  $\text{CO}_2$  formed when 20. moles of HCl is completely consumed?

(1) 5.0 mol                      (3) 20. mol  
 (2) 10. mol                      (4) 40. mol

- 7 Given the balanced equation representing a reaction:



What is the mole ratio of  $\text{H}_2(\text{g})$  to  $\text{HF}(\text{g})$  in this reaction?

(1) 1:1                              (3) 2:1  
 (2) 1:2                              (4) 2:3

- 8 What is the chemical formula for sodium sulfate?

(1)  $\text{Na}_2\text{SO}_3$                       (3)  $\text{NaSO}_3$   
 (2)  $\text{Na}_2\text{SO}_4$                       (4)  $\text{NaSO}_4$

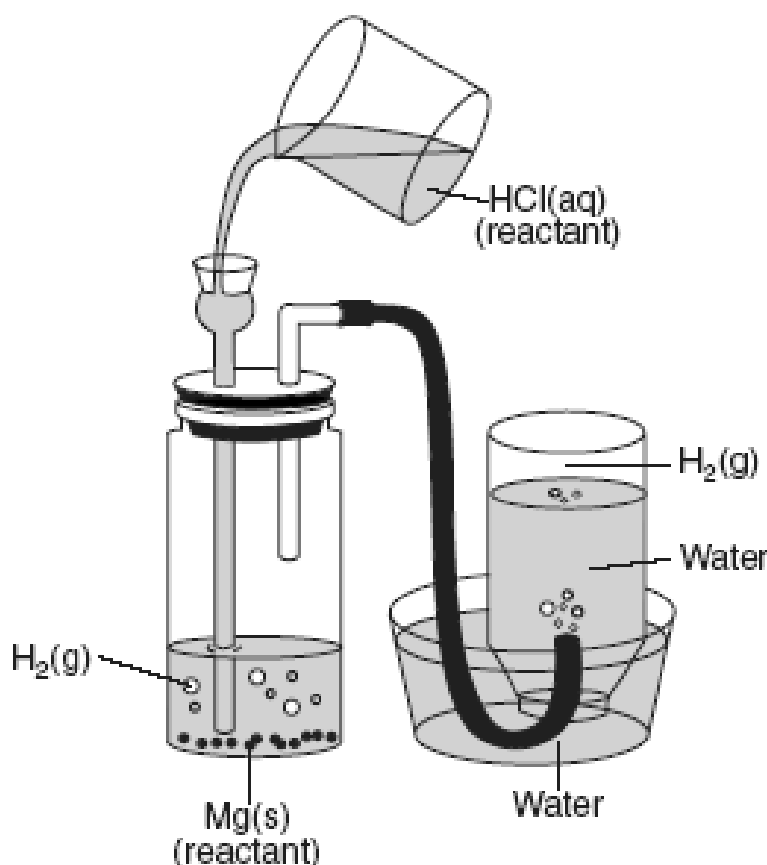
- 10 Which chemical equation is correctly balanced?

(1)  $\text{H}_2(\text{g}) + \text{O}_2(\text{g}) \rightarrow \text{H}_2\text{O}(\text{g})$   
 (2)  $\text{N}_2(\text{g}) + \text{H}_2(\text{g}) \rightarrow \text{NH}_3(\text{g})$   
 (3)  $2\text{NaCl}(\text{s}) \rightarrow \text{Na}(\text{s}) + \text{Cl}_2(\text{g})$   
 (4)  $2\text{KCl}(\text{s}) \rightarrow 2\text{K}(\text{s}) + \text{Cl}_2(\text{g})$

Period \_\_\_\_\_

Base your answers to questions 82 through 85 on the information below.

A student places a 2.50-gram sample of magnesium metal in a bottle and fits the bottle with a 2-hole stopper as shown in the diagram. Hydrochloric acid is added to the bottle, causing a reaction. As the reaction proceeds, hydrogen gas travels through the tubing to an inverted bottle filled with water, displacing some of the water in the bottle.



- 82 Balance the equation *in your answer booklet* for the reaction of magnesium and hydrochloric acid, using the smallest whole-number coefficients. [1]
- 83 Identify the type of chemical reaction that occurs when magnesium reacts with hydrochloric acid. [1]
- 84 In the space *in your answer booklet*, show a correct numerical setup for calculating the number of moles of magnesium used in the experiment. [1]
- 85 Based on Reference Table J, explain why Ag(s) will *not* react with HCl(aq) to generate H<sub>2</sub>(g). [1]

Period \_\_\_\_\_



83 \_\_\_\_\_

84

85 \_\_\_\_\_

\_\_\_\_\_

\_\_\_\_\_


33 What is the percent composition by mass of nitrogen in  $\text{NH}_4\text{NO}_3$  (gram-formula mass = 80.0 grams/mole)?

- (1) 17.5%                      (3) 52.5%  
(2) 35.0%                      (4) 60.0%

9 The correct chemical formula for iron(II) sulfide is

- (1)  $\text{FeS}$                                       (3)  $\text{FeSO}_4$   
(2)  $\text{Fe}_2\text{S}_3$                                   (4)  $\text{Fe}_2(\text{SO}_4)_3$

48 Given the incomplete equation:



Which compound is represented by X?

- (1)  $\text{FeO}$                                       (3)  $\text{Fe}_3\text{O}_2$   
(2)  $\text{Fe}_2\text{O}_3$                                   (4)  $\text{Fe}_3\text{O}_4$

31 The percentage by mass of Br in the compound  $\text{AlBr}_3$  is closest to

- (1) 10.%                                      (3) 75%  
(2) 25%                                      (4) 90.%



- 1) How many oxygen atoms are represented in the formula  $Al_2(CO_3)_3$ ?
- a) 3                      b) 9                      c) 10                      d) 6
- 2) What is the total number of atoms present in 1 mole of  $Ca_3(PO_4)_2$ ?
- a) 8                      b) 5                      c) 10                      d) 13
- 3) What is the total mass of iron in 1.0 mole of  $Fe_2O_3$ ?
- a) 72 g                  b) 112 g                  c) 56 g                  d) 160 g
- 4) What is the gram formula mass of  $Li_2SO_4$ ?
- a) 206 g                  b) 55 g                      c) 110 g                  d) 54 g
- 5) What is the percent composition by mass of sulfur in  $H_2SO_4$ ? [formula mass = 98]
- a) 98%                  b) 16%                  c) 65%                  d) 33%
- 6) A hydrate is a compound with water molecules incorporated into its crystal structure. In an experiment to find the percent by mass of water in a hydrated compound, the following data were recorded:

Mass of test tube + hydrate crystals before heating	25.3 grams
Mass of test tube	21.3 grams
Mass of test tube + anhydrate crystals after heating	22.3 grams

What is the percent by mass of water in the hydrate?

- a) 75%                  b) 50%                      c) 8.0%                      d) 95%
- 7) Which of the following statements explains why mass is lost when a student heats a sample of  $BaCl_2 \cdot 2H_2O$  crystals?
- a) water is given off as a gas                      c) chlorine is given off as a gas  
b) the crystals sublime                              d) the crystals fuse (melt)
- 8) When the equation  $H_2S + O_2 \rightarrow H_2O + SO_2$  is completely balanced using the *smallest* whole numbers, the sum of all the coefficients is
- a) 9                      b) 11                      c) 7                      d) 5

9) What is the percent by mass of water in the hydrate  $\text{Na}_2\text{CO}_3 \cdot 10\text{H}_2\text{O}$  [formula mass = 286]?

- a) 26.1%                      b) 62.9%                      c) 6.89%                      d) 214.5%

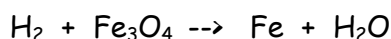
10) How many grams are there in 2.5 moles of  $\text{C}_2\text{H}_5\text{OH}$ ?

- a) 18                              b) 115                              c) 46                              d) 0.05

11) Which quantity is equivalent to 146 grams of  $\text{NaCl}$ ?

- a) 1.0 mole                      b) 2.5 moles                      c) 2.0 moles                      d) 1.5 moles

12) The equation below is best classified as which type of chemical reaction?

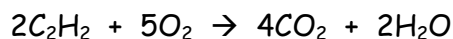


- a) Synthesis    c) Single replacement  
b) Combustion    d) Double replacement

13) When the equation  $\text{NaBr} + \text{H}_3\text{PO}_4 \rightarrow \text{Na}_3\text{PO}_4 + \text{HBr}$  is balanced using the smallest whole numbers, the sum of the coefficients will be

- a) 6                                      b) 8                                      c) 5                                      d) 4

14) The equation below is best classified as which type of chemical reaction?



- a) Synthesis    c) Single replacement  
b) Combustion    d) Double replacement

15) Given the reaction:  $2\text{C}_2\text{H}_6 + 7\text{O}_2 \rightarrow 4\text{CO}_2 + 6\text{H}_2\text{O}$

What is the ratio of moles of  $\text{CO}_2$  produced to moles of  $\text{C}_2\text{H}_6$  consumed?

- a) 7 to 2                              b) 2 to 1                              c) 1 to 1                              d) 3 to 2

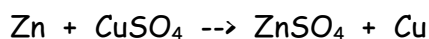
16) Which represents the greatest mass of chlorine?

- a) 1 atom of chlorine    c) 1 mole of chlorine  
b) 1 molecule of chlorine    d) 1 gram of chlorine

17) Given the reaction:  $2\text{Na} + 2\text{H}_2\text{O} \rightarrow 2\text{NaOH} + \text{H}_2$ , what is the total number of moles of hydrogen produced when 4 moles of sodium react completely?

- a) 1                                      b) 2                                      c) 3                                      d) 4

18) What type of reaction best describes the following chemical reaction?



- a) single replacement  
 b) double replacement  
 c) decomposition  
 d) synthesis

19) Which chemical equation best represent a decomposition reaction?

- a)  $\text{Cl}_2 + 2\text{KI} \rightarrow 2\text{KCl} + \text{I}_2$   
 b)  $2\text{Al} + 3\text{Cl}_2 \rightarrow 2\text{AlCl}_3$   
 c)  $\text{H}_2\text{CO}_3 \rightarrow \text{H}_2\text{O} + \text{CO}_2$   
 d)  $\text{KCl} + \text{AgNO}_3 \rightarrow \text{KNO}_3 + \text{AgCl}$

20) What is the molecular formula of a compound that has a molecular mass of 54 and an empirical formula of  $\text{C}_2\text{H}_3$ ?

- a)  $\text{C}_8\text{H}_{12}$   
 b)  $\text{C}_6\text{H}_9$   
 c)  $\text{C}_4\text{H}_6$   
 d)  $\text{C}_2\text{H}_3$

21) What is the empirical formula of the compound whose molecular formula is  $\text{P}_4\text{O}_{10}$ ?

- a)  $\text{P}_8\text{O}_{20}$   
 b)  $\text{PO}_2$   
 c)  $\text{P}_2\text{O}_5$   
 d)  $\text{PO}$

22) Which of the following is an empirical formula?

- a)  $\text{H}_2\text{O}_2$   
 b)  $\text{H}_2\text{O}$   
 c)  $\text{C}_2\text{H}_2$   
 d)  $\text{C}_4\text{H}_8$

23) Which represents *both* an empirical and molecular formula?

- a)  $\text{P}_2\text{O}_5$   
 b)  $\text{C}_3\text{H}_6$   
 c)  $\text{N}_2\text{O}_4$   
 d)  $\text{C}_6\text{H}_{12}\text{O}_6$

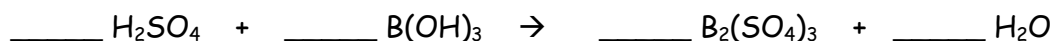
### Constructed Response Questions

For questions 24 and 25, show all work and express your answer in the appropriate units.

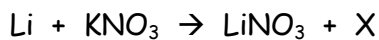
24) Calculate the gram formula mass of  $\text{ZnSO}_4$ . (3 pts)

25) Use your answer from 23 to calculate the percent by mass of zinc in  $\text{ZnSO}_4$ . (3 pts)

26) Balance the following reaction and reduce to the *lowest* whole number coefficients: (1 pt)

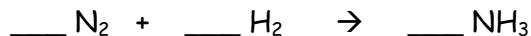


27) Li and KNO<sub>3</sub> according to the following equation:



Write the formula for the missing product X. (1 pt)

Use the chemical equation below to answer questions 28-30.



28) Balance the equation above using the lowest whole number coefficients.

29) How many moles of H<sub>2</sub> are required to produce 6.5 moles of NH<sub>3</sub>? Show all work and make sure your answer has the correct number of significant figures and proper units.

30) How many grams of NH<sub>3</sub> are produced if 50.0 grams of N<sub>2</sub> are consumed? Show all work and make sure your answer has the correct number of significant figures and proper units.

For question 31, show all work and make sure your answer has the correct number of significant figures and proper units.

31) A compound consists of 85% silver and 15% fluorine by mass.

a) What is the empirical formula for this compound?

b) What is the molecular formula (molar mass = 126.9g)

For questions 24 and 25, show all work and express your answer in the appropriate units.

1. \_\_\_\_\_

24) Calculate the gram formula mass of  $\text{ZnSO}_4$ . (3 pts)

2. \_\_\_\_\_

3. \_\_\_\_\_

4. \_\_\_\_\_

5. \_\_\_\_\_

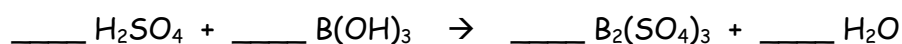
6. \_\_\_\_\_

25) Use your answer from 23 to calculate the percent by mass of zinc in  $\text{ZnSO}_4$ . (3 pts)

7. \_\_\_\_\_

26) Balance the following reaction using the lowest whole number coefficients: (1 pt)

8. \_\_\_\_\_

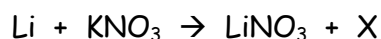


9. \_\_\_\_\_

10. \_\_\_\_\_

27) Li and  $\text{KNO}_3$  according to the following equation:

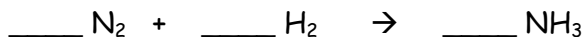
11. \_\_\_\_\_



12. \_\_\_\_\_

Write the formula for the missing product X. \_\_\_\_\_ (1 pt)

13. \_\_\_\_\_



14. \_\_\_\_\_

28) Balance the equation above using the lowest whole number coefficients.

15. \_\_\_\_\_

16. \_\_\_\_\_

29) How many moles of  $\text{H}_2$  are required to produce 6.5 moles of  $\text{NH}_3$ ? Show all work and make sure your answer has the correct number of significant figures and proper units.

17. \_\_\_\_\_

18. \_\_\_\_\_

19. \_\_\_\_\_

30) How many grams of  $\text{NH}_3$  are produced if 50.0 grams of  $\text{N}_2$  are consumed? Show all work and make sure your answer has the correct number of significant figures and proper units.

20. \_\_\_\_\_

21. \_\_\_\_\_

22. \_\_\_\_\_

23. \_\_\_\_\_

31) A compound consists of 85% silver and 15% fluorine by mass (molar mass = 126.9g).

a) What is the empirical formula for this compound?

b) What is the molecular formula?